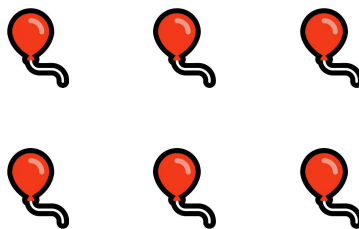



NOME: _____


DATA: ____/____/____ MATEMÁTICA

CONTANDO E AGRUPANDO

1. CIRCULE O GRUPO QUE POSSUI EXATAMENTE 10 ELEMENTOS:



2. CONTE OS DOCES ABAIXO E RESPONDA:



A) QUANTOS DOCES TEM NO TOTAL? _____

B) CIRCULE UM GRUPO DE **10 DOCES** (UMA DEZENA).

C) QUANTOS DOCES FICARAM **FORA** DO CÍRCULO? _____